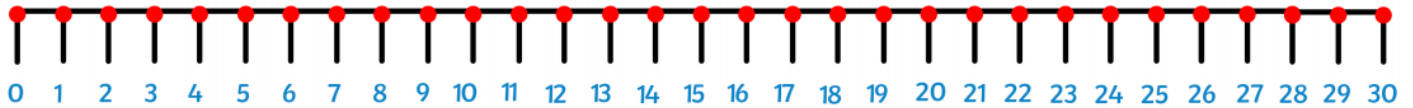


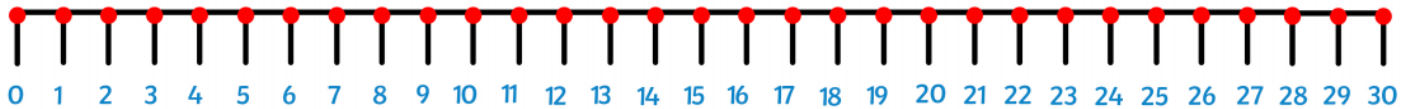
TBAT: solve missing number problems using addition up to 30

Start on first number on number line	
Count on to the answer	
Write in how many jumps to get to total number	

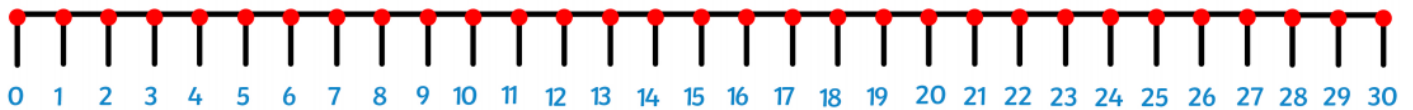
$$16 + \underline{\quad} = 24$$



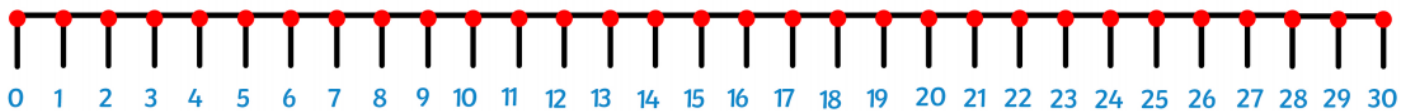
$$7 + \underline{\quad} = 21$$



$$18 + \underline{\quad} = 29$$



$$11 + \underline{\quad} = 30$$



$$14 + \underline{\quad} = 25$$

