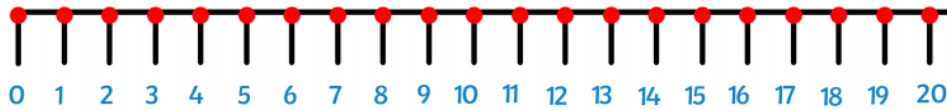


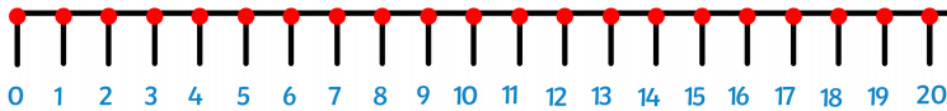
TBAT: solve missing number problems using subtraction up to 20

Start on first number of the question	
Count back to the answer	
Write in how many jumps to get to total number	

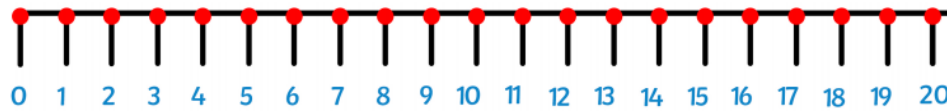
$$16 - \underline{\quad} = 7$$



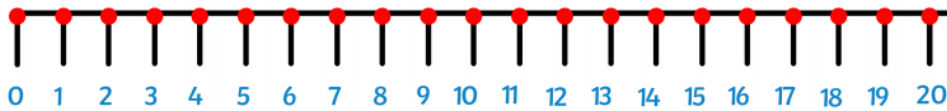
$$18 - \underline{\quad} = 10$$



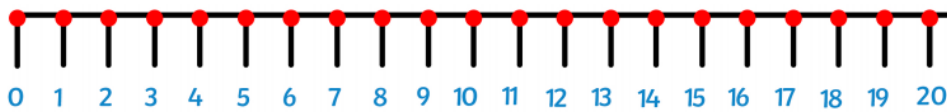
$$20 - \underline{\quad} = 16$$



$$19 - \underline{\quad} = 4$$



$$20 - \underline{\quad} = 2$$



$$18 - \underline{\quad} = 5$$



$$20 - \underline{\quad} = 9$$

