



TBAT: compare and order temperatures

Use <, > and = to compare the temperatures and then put them in order from coolest to hottest.

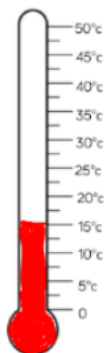
A




B




C



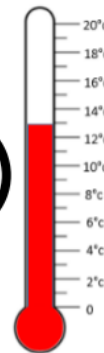
D



E




F



G



H



Coollest to hottest order

Mollie took the temperature at 12pm and again at 5pm.

Mollie took the temperature at 12pm and again at 5pm.

There was a difference of 7°C .

What could the temperature be?

What is the same and what is different about the thermometers/temperatures?

