

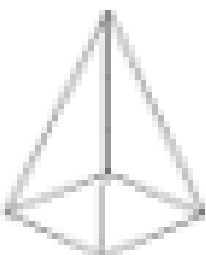













TBAT: identify and describe 2D shapes

Does shape have more than 1 face	<input type="checkbox"/>
Is the shape flat	<input type="checkbox"/>
Circle 2D shape	<input type="checkbox"/>
Look at sides and vertices	<input type="checkbox"/>
Vertices - where two sides meet	<input type="checkbox"/>

Circle the 2D shapes that you can see below. After circling all the shapes write down the name and amount of sides and vertices each shape has.



Shapes

_____ - sides _____ vertices _____

_____ - sides _____ vertices _____

_____ - sides _____ vertices _____

_____ - sides _____ vertices _____

_____ - sides _____ vertices _____

_____ - sides _____ vertices _____

_____ - sides _____ vertices _____