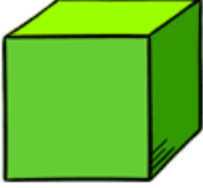
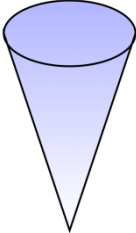
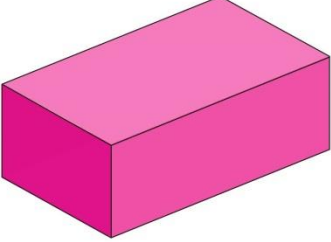

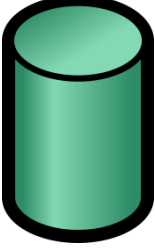
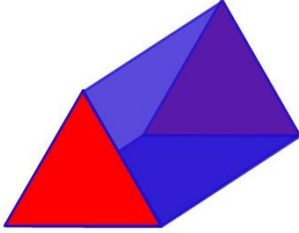


TBAT: identify 2D shapes that are on the faces of 3D shapes

Can you spot the 2D shapes on the 3D shapes?

	Name of 3D shape _____ 2D shape I can see _____
	Name of 3D shape _____ 2D shape I can see _____
	Name of 3D shape _____ 2D shape I can see _____
	Name of 3D shape _____ 2D shapes I can see _____
	Name of 3D shape _____ 2D shape I can see _____
	Name of 3D shape _____ 2D shapes I can see _____