






TBAT: describe 3D shapes

How many faces, vertices and edges	
Vertices - where two edges meet	

Write the name of each shape you see and then write down how many faces, edges and vertices it has.

Shape names - cylinder, cube, pyramid, sphere, cuboid

 <p>This shape is a _____</p>	This shape has: _____ Faces _____ Edges _____ Vertices
 <p>This shape is a _____</p>	This shape has: _____ Faces _____ Edges _____ Vertices
 <p>This shape is a _____</p>	This shape has: _____ Faces _____ Edges _____ Vertices
 <p>This shape is a _____</p>	This shape has: _____ Faces _____ Edges _____ Vertices
 <p>This shape is a _____</p>	This shape has: _____ Faces _____ Edges _____ Vertices