





## Six in Six – B

Convert $8\frac{1}{2}$ hours into minutes.	
What time is it? 	
Calculate the perimeter?      46cm 17cm 	
$784 \div 100 =$	
$11 \times 12 =$	
Write the following time in the 24 hour clock: 9.45pm	
$\frac{4}{8}$ of 48	
$89.89 - 19.53 =$	
$678 \times 7 =$	
$988 \div 7 =$	

## Answers

Convert $8\frac{1}{2}$ hours into minutes.	510 minutes
What time is it? 	12:10 or ten past twelve
Calculate the perimeter? 46cm 17cm 	126cm
$784 \div 100 =$	7.84
$11 \times 12 =$	132
Write the following time in the 24 hour clock: 9.45pm	21:45
$\frac{4}{8}$ of 48	24
$89.89 - 19.53 =$	70.36
$678 \times 7 =$	4746
$988 \div 7 =$	141 r1