


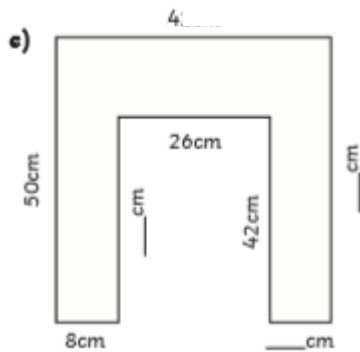
## Six in Six – B

$$3576 + \square = 9876$$

What time is it?



Calculate the missing measurements and then work out the perimeter?



$$432 \div 10 =$$

$$3 \times 12 =$$


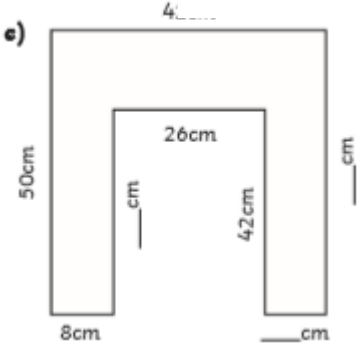
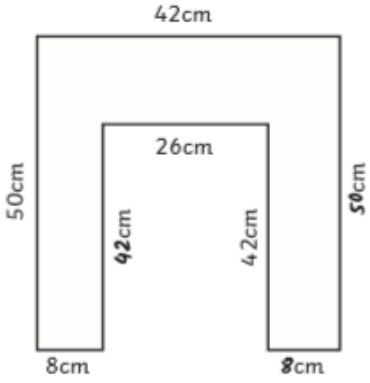
Write the following time in the 24 hour clock: 7.55pm

$$\frac{4}{12} \text{ of } 36$$

$$876 \times 9 =$$

$$9689 \div 8 =$$

## Answers

$3576 + \square = 9876$	<span style="color: red;">6300</span>
What time is it? 	<span style="color: red;">1:55 or five to two</span>
Calculate the missing measurements and then work out the perimeter? 	e)  Perimeter = <span style="color: red;"><i>268cm or 2m 68cm</i></span>
$432 \div 10 =$	<span style="color: red;">43.2</span>
$3 \times 12 =$	<span style="color: red;">36</span>
Write the following time in the 24 hour clock: 7.55pm	<span style="color: red;">19:55</span>
$\frac{4}{12}$ of 36	<span style="color: red;">12</span>
$876 \times 9 =$	<span style="color: red;">7884</span>
$9689 \div 8 =$	<span style="color: red;">1211 r1</span>